

Assignment:-4 Subject: Mathematics Class:-I Teacher:-Mrs. Paramjeet Kaur

Name:-_____ Class & Sec.:-_____ Roll No.:-_____ Date:-

Q1) Find and colour:-


ORDINAL NUMBERS –

1 st	2 nd	3 rd	4 th	5 th
first	second	third	fourth	fifth

1) Color the second elephant.




2) Color the first bear.




3) Color the fourth snail.



4) Color the third cat.



5) Color the fifth dog.



Q.2) Use the pictures below to answer the following questions.



zebra



monkey



lion



giraffe



elephant

(a) Who is second in line? _____

(b) Which animal is fourth in line? _____

(c) In which position is the lion? _____

(d) How many animals come before the elephant? _____

(e) How many animals are after the lion? _____

Q3) Cross out (✗) the number taken away. Then write the answer

Example:

4 take away 2 equals 2

a) $3 - 2 =$ _____

b) $5 - 1 =$ _____

c) $4 - 3 =$ _____

d) $3 - 3 =$ _____

e) $5 - 3 =$ _____

Q.4) Write table of 4.

4	x	1	=	4	
4	x	2	=	8	
4	x	3	=	12	
4	x	4	=	16	
4	x	5	=	20	
4	x	6	=	24	
4	x	7	=	28	
4	x	8	=	32	
4	x	9	=	36	
4	x	10	=	40	